

Maggiore > o minore < ?

$7 \square 12$

$14 \square 19$

$9 \square 13$

$15 \square 10$

$8 \square 16$

$11 \square 6$

$13 \square 18$

$19 \square 11$

$17 \square 16$

$5 \square 15$

$20 \square 10$

$18 \square 19$

Completa le sequenze

$13 \xrightarrow{+1} \square \xrightarrow{+2} \square \xrightarrow{+1} \square \xrightarrow{+2} \square \xrightarrow{+1} \square$




$17 \xrightarrow{-1} \square \xrightarrow{-2} \square \xrightarrow{-1} \square \xrightarrow{-2} \square \xrightarrow{-1} \square$

$18 \xrightarrow{+2} \square \xrightarrow{-3} \square \xrightarrow{+0} \square \xrightarrow{-7} \square \xrightarrow{+5} \square$

$11 \xrightarrow{-1} \square \xrightarrow{+8} \square \xrightarrow{-2} \square \xrightarrow{+1} \square \xrightarrow{-7} \square$

Ordina i numeri dal maggiore al minore come nell'esempio.

18	12	3	9	20	15	6	17
A	A	E	L	F	F	L	R



20							
F							