


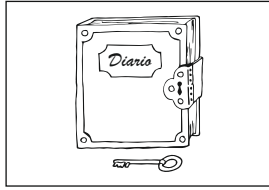
LE MISURE DI LUNGHEZZA

MULTIPLI			UNITA'	SOTTOMULTIPLI		
			m			

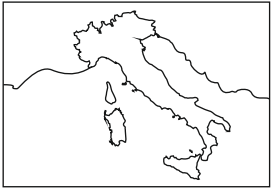
1. Indica l'unità di misura adatta.




.....



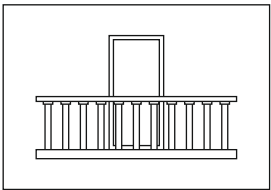
.....



.....



.....



.....



.....

2. Scomponi

25,6 dm
7,856 m
0,56 km
1320 mm
95 m
1,42 km
16,57 hm
35,6 dam
0,4 m
14,3 cm
0,07 km
153 cm

km	hm	dam	m	dm	cm	mm

3. Metti il simbolo < > =

1 m 1 dam

10 cm 1 hm

1 hm 10 m

1 dm 1 dam

1 dam 1 mm

1 mm 1 cm

4. Risolvi le seguenti equivalenze

5 km = m

8 dam = m

400 cm = m

0,5 km = m

50 dam = m

750 cm = m

3,4 km = m

0,6 dam = m

16 cm = m

3 hm = m

30 dm = m

2 000 mm = m

15 hm = m

200 dm = m

3 500 mm = m

0,04 hm = m

15 dm = m

856 mm = m