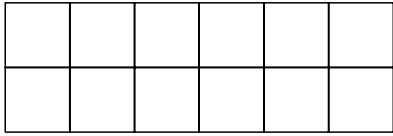
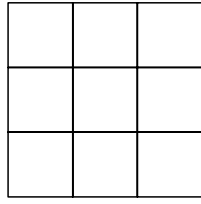


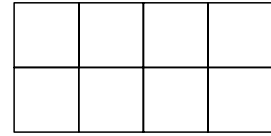
① Colora la parte indicata dalla frazione



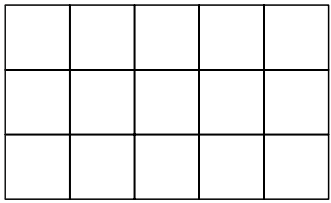
$\frac{8}{12}$



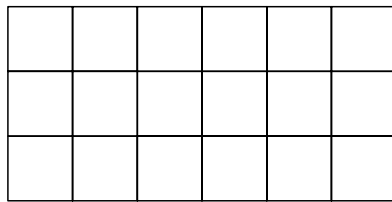
$\frac{5}{9}$



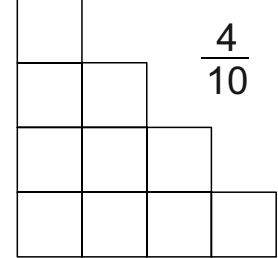
$\frac{6}{8}$



$\frac{9}{15}$

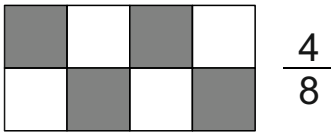


$\frac{12}{18}$

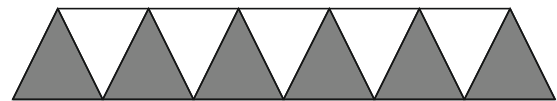
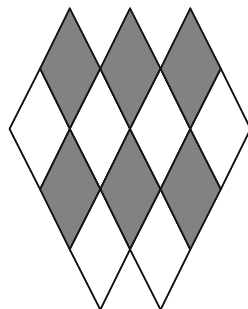

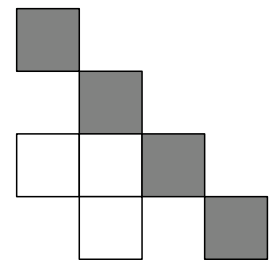
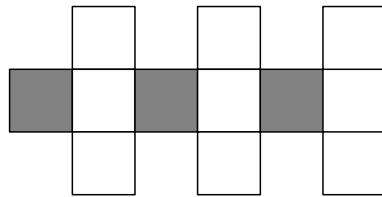
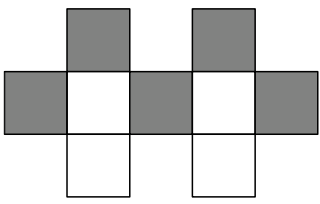
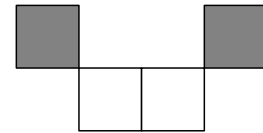
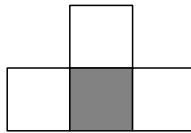


$\frac{4}{10}$

② Scrivi la frazione corrispondente, come nell'esempio



$\frac{4}{8}$



③ Collega con una freccia

tre quarti

$\frac{2}{3}$

cinque noni

$\frac{6}{4}$

un terzo

$\frac{3}{4}$

sei quarti

$\frac{3}{8}$

due terzi

$\frac{1}{3}$

tre ottavi

$\frac{5}{9}$