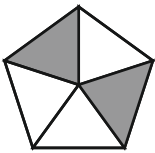
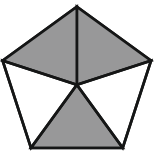
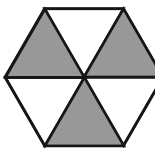
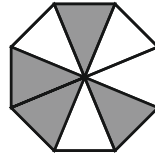
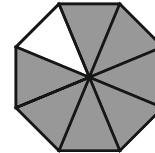
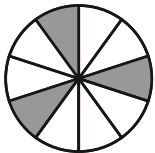

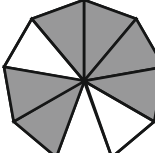
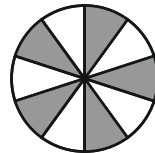


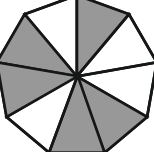
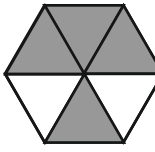

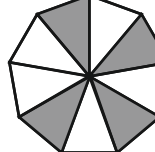
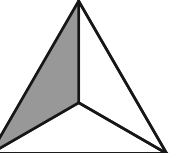

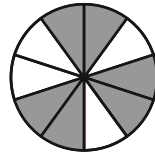
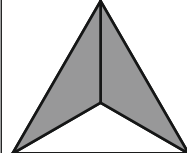
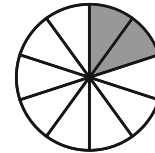


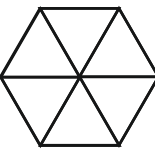
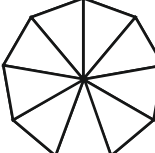
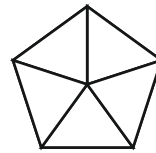

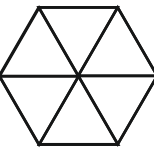


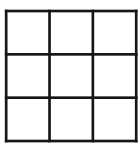
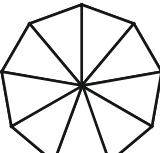
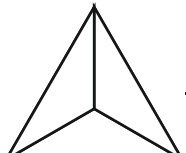

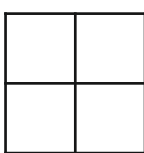
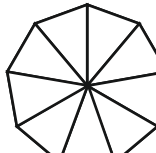
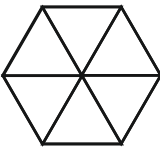
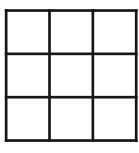
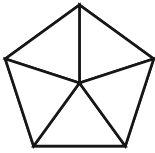




LE FRAZIONI

1. Scrivi accanto ad ogni figura la frazione corrispondente alle parti colorate.

 —	 —	 —	 —	 —
 —	 —	 —	 —	 —
 —	 —	 —	 —	 —
 —	 —	 —	 —	 —

2. Colora le parti della figura indicate dalla frazione.

 $\frac{2}{3}$	 $\frac{5}{7}$	 $\frac{1}{6}$	 $\frac{3}{9}$	 $\frac{4}{5}$
 $\frac{4}{10}$	 $\frac{5}{6}$	 $\frac{3}{4}$	 $\frac{7}{10}$	 $\frac{1}{9}$
 $\frac{4}{9}$	 $\frac{3}{3}$	 $\frac{2}{10}$	 $\frac{1}{4}$	 $\frac{7}{9}$
 $\frac{3}{6}$	 $\frac{9}{9}$	 $\frac{2}{5}$	 $\frac{8}{10}$	 $\frac{6}{7}$