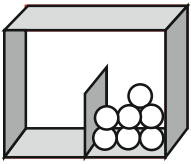
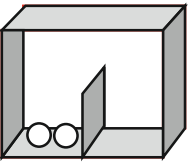
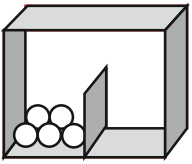
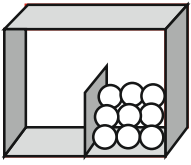
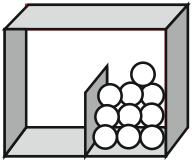
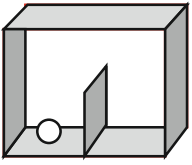
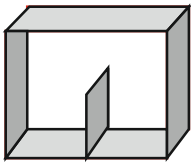
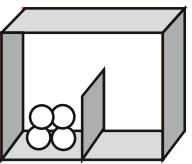
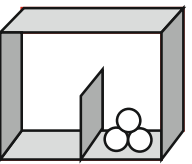
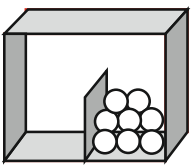
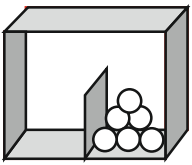
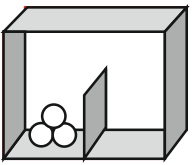


GLI AMICI DEL 10



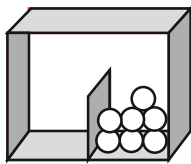
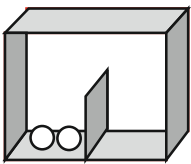
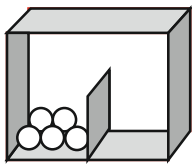
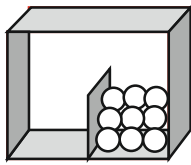
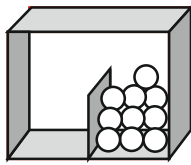
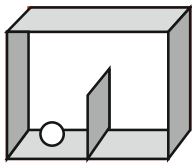
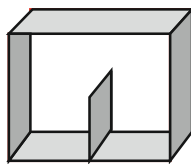
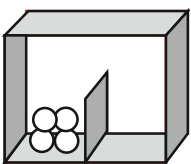
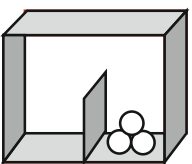
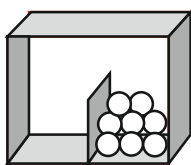
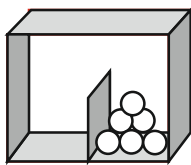
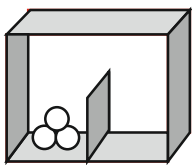
QUANTE PALLINE SERVONO PER FORMARE LA DECINA?

1 	2 	3 
3 ₆ 2 ₈ 4 ₅	9 ₂ 8 ₉ 7 ₁₁	6 ₈ 4 ₆ 5 ₁
4 	5 	6 
0 ₄ 1 ₅ 2 ₁₁	0 ₇ 2 ₁ 1 ₉	8 ₁₂ 9 ₁₀ 7 ₇
7 	8 	9 
9 ₅ 10 ₁₁ 8 ₃	7 ₁ 5 ₁₀ 6 ₃	7 ₂ 8 ₇ 6 ₆
10 	11 	12 
2 ₁₂ 1 ₄ 0 ₃	5 ₁₂ 3 ₁₀ 4 ₈	6 ₉ 8 ₂ 7 ₄

GLI AMICI DEL 10



QUANTE PALLINE SERVONO PER FORMARE LA DECINA?

1 	2 	3 
3 ₆ 2 ₈ 4 ₅	9 ₂ 8 ₉ 7 ₁₁	6 ₈ 4 ₆ 5 ₁
4 	5 	6 
0 ₄ 1 ₅ 2 ₁₁	0 ₇ 2 ₁ 1 ₉	8 ₁₂ 9 ₁₀ 7 ₇
7 	8 	9 
9 ₅ 10 ₁₁ 8 ₃	7 ₁ 5 ₁₀ 6 ₃	7 ₂ 8 ₇ 6 ₆
10 	11 	12 
2 ₁₂ 1 ₄ 0 ₃	5 ₁₂ 3 ₁₀ 4 ₈	6 ₉ 8 ₂ 7 ₄